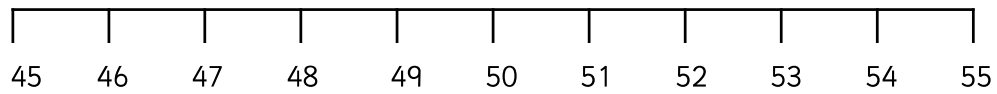
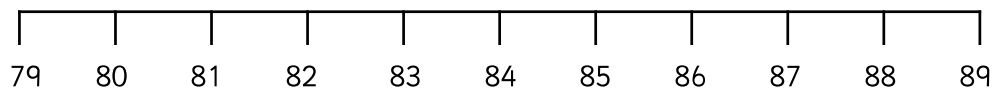


Circle the numbers **54**, **46** and **50** on the number line.



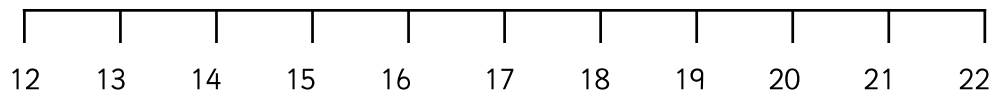
Put the numbers in order- starting from the smallest. _____ , _____ , _____

Circle the numbers **80**, **89** and **79** on the number line.



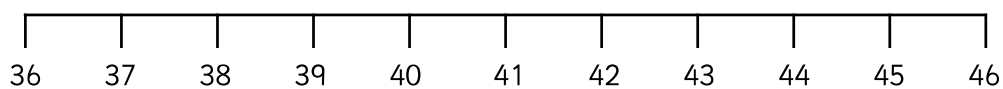
Put the numbers in order- starting from the smallest. _____ , _____ , _____

Circle the numbers **20**, **16** and **18** on the number line.



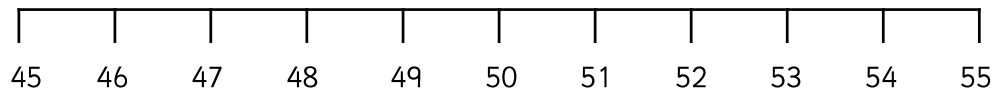
Put the numbers in order- starting from the greatest. _____ , _____ , _____

Circle the numbers **40**, **37** and **46** on the number line.



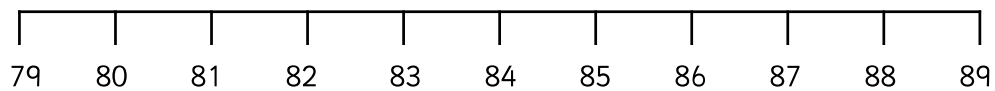
Put the numbers in order- starting from the greatest. _____ , _____ , _____

Circle the numbers **48**, **54**, **46** and **50** on the number line.



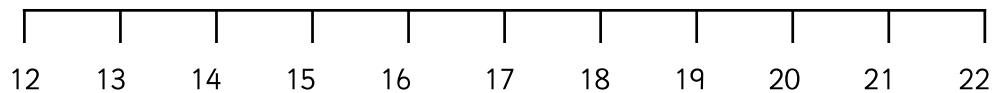
Put the numbers above in order- starting from the smallest. _____ , _____ , _____ , _____

Circle the numbers **85**, **80**, **89** and **79** on the number line.



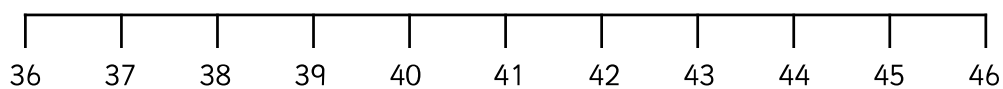
Put the numbers above in order- starting from the smallest. _____ , _____ , _____ , _____

Circle the numbers **20**, **16**, **13** and **18** on the number line.



Put the numbers above in order- starting from the greatest. _____ , _____ , _____ , _____

Circle the numbers **40**, **37**, **44** and **46** on the number line.



Put the numbers above in order- starting from the greatest. _____ , _____ , _____ , _____



45, 54, 46 and 50

Put the numbers above in order- starting from the smallest. _____ , _____ , _____ , _____

91, 19, 99 and 90

Put the numbers above in order- starting from the smallest. _____ , _____ , _____ , _____

76, 67, 66 and 77

Put the numbers above in order- starting from the smallest. _____ , _____ , _____ , _____

3, 33, 13 and 31

Put the numbers above in order- starting from the smallest. _____ , _____ , _____ , _____

21, 12, 20 and 22

Put the numbers above in order- starting from the greatest. _____ , _____ , _____ , _____

59, 95, 99 and 55

Put the numbers above in order- starting from the greatest. _____ , _____ , _____ , _____

44, 40, 14 and 41

Put the numbers above in order- starting from the greatest. _____ , _____ , _____ , _____

68, 66, 60 and 86

Put the numbers above in order- starting from the greatest. _____ , _____ , _____ , _____